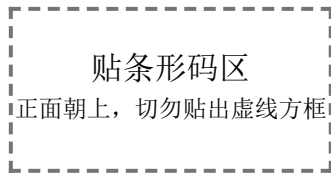


周庄中学八年级数学限时作业答卷 2022.3

姓名: _____

班级: _____

学号: _____



正确填涂: ☒ 缺考标记: ☐

一、选择题 (每题3分, 共30分)

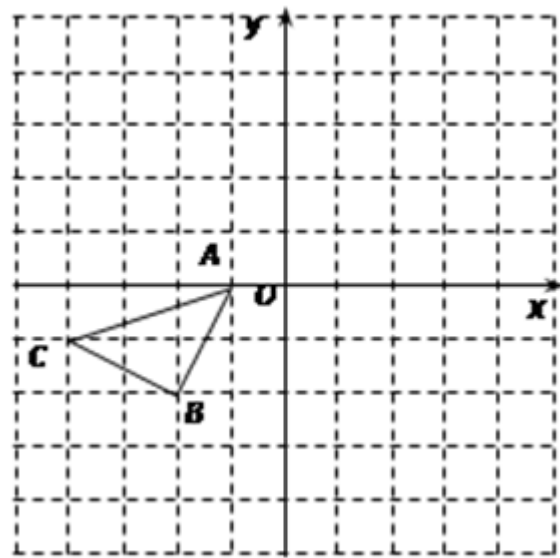
- | | | |
|----------------------------------------------------------------------------------------------------------------|----------------------------------------------------------------------------------------------------------------|-----------------------------------------------------------------------------------------------------------------|
| 1. <input type="checkbox"/> A <input type="checkbox"/> B <input type="checkbox"/> C <input type="checkbox"/> D | 5. <input type="checkbox"/> A <input type="checkbox"/> B <input type="checkbox"/> C <input type="checkbox"/> D | 9. <input type="checkbox"/> A <input type="checkbox"/> B <input type="checkbox"/> C <input type="checkbox"/> D |
| 2. <input type="checkbox"/> A <input type="checkbox"/> B <input type="checkbox"/> C <input type="checkbox"/> D | 6. <input type="checkbox"/> A <input type="checkbox"/> B <input type="checkbox"/> C <input type="checkbox"/> D | 10. <input type="checkbox"/> A <input type="checkbox"/> B <input type="checkbox"/> C <input type="checkbox"/> D |
| 3. <input type="checkbox"/> A <input type="checkbox"/> B <input type="checkbox"/> C <input type="checkbox"/> D | 7. <input type="checkbox"/> A <input type="checkbox"/> B <input type="checkbox"/> C <input type="checkbox"/> D | |
| 4. <input type="checkbox"/> A <input type="checkbox"/> B <input type="checkbox"/> C <input type="checkbox"/> D | 8. <input type="checkbox"/> A <input type="checkbox"/> B <input type="checkbox"/> C <input type="checkbox"/> D | |

二、填空 (每空2分, 共18分)

- | | |
|-----------|-----------|
| 11. _____ | 12. _____ |
| 13. _____ | 14. _____ |
| 15. _____ | |
| 16. _____ | 17. _____ |
| 18. _____ | |

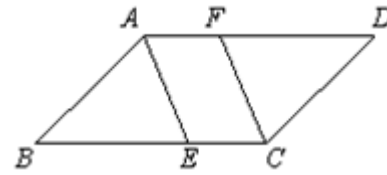
三、简答题 (共8小题, 共52分)

19. (6分) (1) (2) 画图:

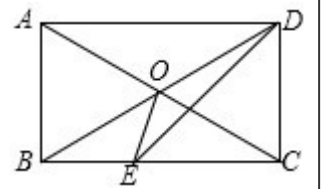


(3) _____

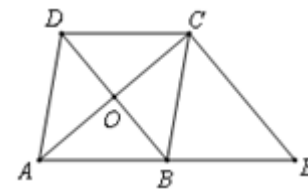
20. (6分)



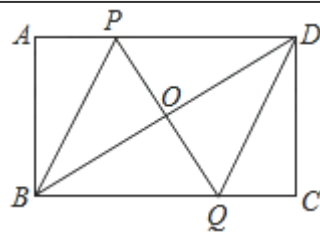
22. (7分)



21. (6分)



23. (7分)



24. (10分)

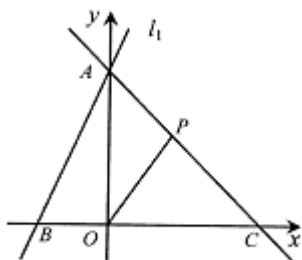


图 1

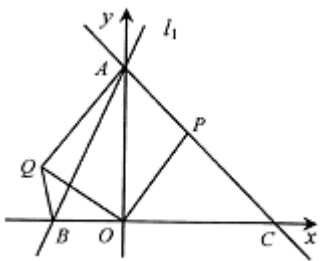
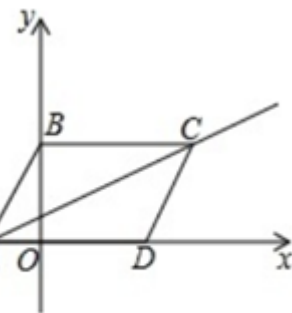
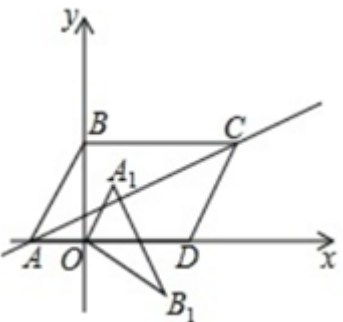
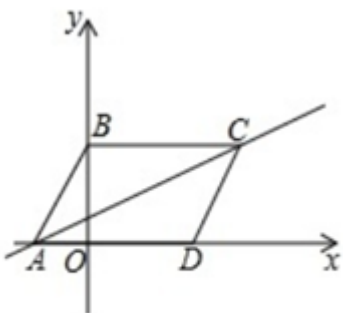


图 2

25. (10分)



备用图1



备用图2